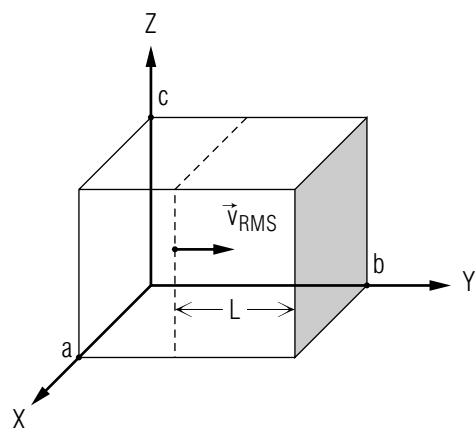


TEMPERATURE AND PRESSURE OF AN IDEAL GAS: THE EQUATION OF STATE



TEMPERATURE AND PRESSURE OF AN IDEAL GAS: THE EQUATION OF STATE

by
William C. Lane, Michigan State University

1. Introduction	
a. Statistical Methods: Necessary for Crowded Systems 1
b. Microscopic Descriptions Yield Macroscopic Properties	.. 1
2. Temperature of an Ideal Gas	
a. Macroscopic Viewpoint 1
b. Microscopic Viewpoint: An Ideal Gas 2
c. Thermal Equilibrium 3
d. Other Temperature Scales 3
3. Average Pressure of an Ideal Gas	
a. Macroscopic Definition of Pressure and its Units 4
b. Microscopic Definition of Average Pressure 4
c. The Statistical Model of the System 5
d. Calculating Statistical Averages 5
e. Derivation of Average Pressure 5
4. The Equation of State of an Ideal Gas	
a. Definition of State 7
b. Alternate Forms of the Equation of State 7
c. Using the Equation of State 8
Acknowledgments 9
Glossary 9

Title: **Temperature and Pressure of an Ideal Gas: The Equation of State**

Author: William C. Lane, Michigan State University

Version: 5/14/2003 Evaluation: Stage 0

Length: 1 hr; 24 pages

Input Skills:

1. Vocabulary: center of mass (MISN-0-413), frame of reference (MISN-0-412), kinetic energy, joule (MISN-0-414), pressure, volume, density (MISN-0-417).
2. Calculate a particle's change in momentum when it undergoes an elastic collision (MISN-0-413).

Output Skills (Knowledge):

- K1. Vocabulary: absolute temperature scale, Boltzmann's constant, Celsius, equation of state, Fahrenheit, ideal gas, Kelvin, mole, root mean square (RMS) speed, temperature, thermal equilibrium, thermometer.
- K2. Starting from Newton's second law, derive the expression for the pressure the molecules of an ideal gas exert on the walls of a container in terms of their root mean square (RMS) speed.
- K3. State the relation between temperature and ideal-gas average kinetic energy expressed in terms of the RMS speed of the gas molecules.
- K4. Derive the ideal-gas equation of state, starting from microscopic definitions of temperature and pressure.

Output Skills (Problem Solving):

- S1. Given a temperature from one temperature scale (Celsius, Fahrenheit, Kelvin) compute the corresponding temperature for the other scales.
- S2. Given the known macroscopic properties of an ideal gas at one or more different states, use the equation of state to calculate the unknown properties at another state.
- S3. Given a distribution of particles with known masses and velocities, calculate the RMS speed, average kinetic energy, and temperature.

THIS IS A DEVELOPMENTAL-STAGE PUBLICATION
OF PROJECT PHYSNET

The goal of our project is to assist a network of educators and scientists in transferring physics from one person to another. We support manuscript processing and distribution, along with communication and information systems. We also work with employers to identify basic scientific skills as well as physics topics that are needed in science and technology. A number of our publications are aimed at assisting users in acquiring such skills.

Our publications are designed: (i) to be updated quickly in response to field tests and new scientific developments; (ii) to be used in both classroom and professional settings; (iii) to show the prerequisite dependencies existing among the various chunks of physics knowledge and skill, as a guide both to mental organization and to use of the materials; and (iv) to be adapted quickly to specific user needs ranging from single-skill instruction to complete custom textbooks.

New authors, reviewers and field testers are welcome.

PROJECT STAFF

Andrew Schnepf	Webmaster
Eugene Kales	Graphics
Peter Signell	Project Director

ADVISORY COMMITTEE

D. Alan Bromley	Yale University
E. Leonard Jossem	The Ohio State University
A. A. Strassenburg	S. U. N. Y., Stony Brook

Views expressed in a module are those of the module author(s) and are not necessarily those of other project participants.

© 2003, Peter Signell for Project PHYSNET, Physics-Astronomy Dept., Mich. State Univ., E. Lansing, MI 48824; (517) 355-9200 x 2340. For our liberal use policies see:

<http://www.physnet.org/home/modules/license.html>.

TEMPERATURE AND PRESSURE OF AN IDEAL GAS: THE EQUATION OF STATE

by

William C. Lane, Michigan State University

1. Introduction

1a. Statistical Methods: Necessary for Crowded Systems.

When dealing with the mechanics of systems of very large numbers of particles it is necessary to use statistical methods. It's obviously impossible to treat individually each of the molecules of a gas consisting of 10^{20} particles, even if you think you know the laws of physics which determine the motion of each of these particles. Even the most sophisticated computers currently conceived would be hopelessly swamped trying to keep track of the forces acting on each of the 10^{20} particles moving about in the gas, as well as the position, velocity, and acceleration of each. Actually, even if you could obtain all of this detailed information, only summaries or averages of the various quantities would have useful meaning. For this reason statistical mechanical methods are not only the sole practical way, they are the most useful way of dealing with the dynamics of such systems.

1b. Microscopic Descriptions Yield Macroscopic Properties.

The averages of the kinematical and dynamical quantities obtained by statistically describing a microscopic system must be related to measurable quantities. For gases these usually are the volume occupied by the gas, the pressure, temperature, and the number of molecules involved, which together determine the state of the system. For an ideal gas, the simplest model of intermolecular forces is assumed: there are no interactions between the molecules unless their centers happen to coincide, in which case they bounce off one another like hard spheres, and the molecules are assumed to be point masses. For such a model, the equation of state, that is, the relation between the measurable quantities (pressure, volume, temperature), can be derived in a straightforward way once temperature and average pressure are defined.

2. Temperature of an Ideal Gas

2a. Macroscopic Viewpoint. Most of us use the macroscopic viewpoint of temperature in our daily lives. To us, "temperature" has always

been simply a measuring scale to indicate how "hot" or how "cold" something is. We know that temperature is measured with a device known as a "thermometer." We know that "heat" travels from points of high temperature to points of low temperature. However, such a viewpoint is of limited usefulness in describing the temperature of a system of many particles. Before we proceed we must develop a microscopic picture of the system.

2b. Microscopic Viewpoint: An Ideal Gas. In order to illustrate the microscopic view of a large system of particles, we will choose the simplest system we can imagine, an ideal gas. An ideal gas is one in which the intermolecular forces are negligible, and the molecules can be treated as point masses which obey Newton's three laws of motion. The energy of the gas molecules is entirely translational kinetic energy. Temperature is defined as a quantity directly proportional to the average kinetic energy of a molecule, in the center of mass frame of reference.

For a system of N particles whose masses are $m_1, m_2, m_3, \dots, m_N$ and whose speeds are $v_1, v_2, v_3, \dots, v_N$, the average kinetic energy of the particles is:

$$E_{k,ave} = \frac{1}{N} \left[\sum_{i=1}^N \frac{1}{2} m_i v_i^2 \right]. \quad (1)$$

If all the particles have the same mass m , then:

$$\begin{aligned} E_{k,ave} &= \frac{1}{N} \left[\sum_{i=1}^N \frac{1}{2} m v_i^2 \right] \\ &= \frac{1}{2} m \left[\frac{1}{N} \sum_{i=1}^N v_i^2 \right]. \end{aligned}$$

A quantity known as the root mean square speed of the particles, v_{RMS} , is defined such that:

$$\begin{aligned} v_{RMS}^2 &= \frac{1}{N} (v_1^2 + v_2^2 + \dots + v_N^2) \\ &= \frac{1}{N} \sum_{i=1}^N v_i^2. \end{aligned} \quad (2)$$

In the "RMS" notation, the average kinetic energy of a particle in this system is:

$$E_{k,ave} = \frac{1}{2} m v_{RMS}^2. \quad (3)$$

2c. Thermal Equilibrium. For Eq. (3) to be of any use in defining temperature, we must require that the gas molecules have a completely random motion, a condition known as “thermal equilibrium.” At thermal equilibrium, the system has no “memory” of how it was prepared and the only forces acting on the particles are the contact forces felt during collisions with the walls of the gas container and with other molecules. If the system is at thermal equilibrium, the temperature may be defined as a quantity directly proportional to the average kinetic energy of the gas molecules:

$$E_{k,\text{ave}} = \frac{1}{2}mv_{\text{RMS}}^2 = \frac{3}{2}kT,$$

so

$$T = \frac{mv_{\text{RMS}}^2}{3k}. \quad (4)$$

The constant k is called “Boltzmann’s constant.” The numerical value of k is 1.3805×10^{-23} J/K, where K refers to a unit of temperature on the Kelvin absolute temperature scale. On this scale, ice at normal atmospheric pressure melts at 273.15 K, and water boils at 373.15 K at normal atmospheric pressure. If the system is not in thermal equilibrium then temperature is not a meaningful property of the system.

2d. Other Temperature Scales. Several other scales are commonly used for measuring temperatures and will be defined. The Celsius (formerly centigrade) temperature scale is defined by:

$$T_{\text{C}} = (T_{\text{K}} - 273.15) \text{ } ^\circ\text{C}, \quad (5)$$

where T_{C} is the Celsius temperature, T_{K} is the Kelvin temperature, and the Celsius unit of temperature is a “degree Celsius.”

A change in temperature of 1 K is exactly equal to a change in temperature of 1 $^\circ\text{C}$. On this scale, water boils at 100 $^\circ\text{C}$ and freezes at 0 $^\circ\text{C}$. Also used, especially in day-to-day life, is the Fahrenheit temperature scale.

The conversion of temperature from a Celsius scale to a Fahrenheit scale is quite straightforward and can be easily derived without memorizing formulas. Realizing that the two temperature scales are linearly related, we may write:

$$T_{\text{F}} = a(T_{\text{C}}) + b, \quad (6)$$

and merely solve for a and b . This can be done by evaluating Eq. (6) at two temperatures where both the Fahrenheit and Celsius values are known:

- (1) Freezing point of water $\Rightarrow 32 \text{ } ^\circ\text{F} = a(0 \text{ } ^\circ\text{C}) + b$
- (2) Boiling point of water $\Rightarrow 212 \text{ } ^\circ\text{F} = a(100 \text{ } ^\circ\text{C}) + b$

The first relation determines b as 32 $^\circ\text{F}$, and by using this value in the second relation, a is seen to be 1.8 $^\circ\text{F}/^\circ\text{C}$. Converting 1.8 to its fractional equivalent of 9/5, we obtain:

$$T_{\text{F}} = (9/5) T_{\text{C}} + 32 \text{ } ^\circ\text{F}. \quad (7)$$

Equivalently:

$$T_{\text{C}} = (5/9) (T_{\text{F}} - 32 \text{ } ^\circ\text{F}). \quad (8)$$

3. Average Pressure of an Ideal Gas

3a. Macroscopic Definition of Pressure and its Units. For macroscopic systems such as a fluid, pressure has been defined as the force per unit area exerted by the fluid on some surface:

$$P = \frac{F}{A} \quad (9)$$

where F and thus P may vary continuously over A , the surface area¹ units of pressure in the MKS system are newtons per square meter (N/m^2) or joules per cubic meter (J/m^3). Other frequently used units of pressure include the atmosphere (atm), pounds per square inch (lb/in^2 or psi), pounds per square foot (lb/ft^2) and millimeters of mercury (mm of Hg, or torr). The last unit of pressure is based on a method of specifying air pressure by means of measuring the height of a column of mercury in a barometer. The conversion factors between the various systems of units listed above are:

$$1 \text{ atm} = 1.013 \times 10^5 \text{ N}/\text{m}^2 = 760 \text{ torr}$$

$$1 \text{ lb}/\text{in}^2 = 144 \text{ lb}/\text{ft}^2 = 6891 \text{ N}/\text{m}^2$$

3b. Microscopic Definition of Average Pressure. For a system consisting of discrete microscopic gas molecules, we must think in terms of the average pressure exerted by the molecules as they collide elastically

¹See “Archimede’s Principle; Bernoulli’s Theorem” (MISN-0-48).

with the walls of their container. By Newton's second law, the average force exerted by one object on another during a collision is:

$$\vec{F}_{\text{av}} = \frac{\Delta\vec{p}}{\Delta t}, \quad (10)$$

where $\Delta\vec{p}$ is the momentum exchanged during a collision time interval of Δt . We will use this average force to calculate the average pressure of an ideal gas in some container of volume V .

3c. The Statistical Model of the System. We are interested in systems that have reached thermal equilibrium, and at thermal equilibrium the gas molecules are in completely random motion. Also, in order for statistical mechanics to be valid, our system must contain a very large number of molecules. Random motion implies that the molecules are moving in all directions, and the large number of molecules implies both that all directions and allowable speeds are represented and also that the randomness is maintained.²There is no net movement in any direction.

3d. Calculating Statistical Averages . When we calculate macroscopic quantities like pressure and temperature, we are dealing with averages over the many molecules in the system. For ease in computation we can assume from the beginning that all of the molecules move with the same average speed. In order for the net velocity to be zero, then, the number of molecules moving in any one direction must equal the number of molecules moving in the opposite direction. In particular, we could resolve the velocity of each molecule into its three components along the x -, y - and z -axes and use the fact that the sum of the components along any one of the six positive and negative axes must equal the sum along each of the other five. Equivalently, however, we could consider the molecules to be traveling only in the direction of one or another of the axes, with the condition that the number of molecules moving in any one direction must equal the number moving in any other direction. Thus for the sake of calculating macroscopic quantities, we may make the assumption that all of the molecules move with the same average speed and $1/6$ of them move along each of the six positive and negative axes. Temperature is defined directly in terms of the molecules' RMS speed, so it is this "average speed" that we use.

3e. Derivation of Average Pressure. The average pressure of an ideal gas may be derived by considering an imaginary system consisting

²Allowable speeds are those consistent with the temperature of the system. See "Energy Distribution Functions: Boltzmann Distribution" (MISN-0-159).

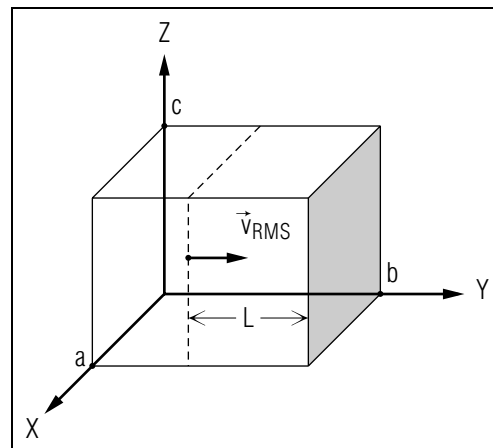


Figure 1. An idealized system used to derive the pressure of an ideal gas.

of a rectangular parallelepiped with side lengths a , b , and c , oriented as shown in Fig. 1. N hard spheres (atoms) of negligible size are contained inside this box. The atoms are moving randomly, and after thermal equilibrium is established we can consider that the RMS speed of these atoms remains fixed. A particular atom moving in the positive y direction with speed v_{RMS} is instantaneously at a distance L from the shaded face of the volume. It will strike the face in time Δt given by:

$$\Delta t = L/v_{\text{RMS}} \quad (11)$$

In that time, all of the other atoms moving in the positive y direction that were within the sub-volume defined by L and the shaded face (of area A) will also strike this face. By the law of conservation of momentum, each atom will impart a momentum $2mv_{\text{RMS}}$ to the wall. The number of these collisions in time Δt is proportional to the subvolume:

$$N_{\text{collisions}} = \left(\frac{LA}{V}\right) \left(\frac{N}{6}\right), \quad (12)$$

where $N/6$ is the total number of atoms moving in the $+y$ -direction, and (LA/V) is the fraction of the total volume V these atoms are contained in. The total momentum exchanged with the wall is therefore:

$$\Delta p_{\text{total}} = N_{\text{collisions}} (2mv_{\text{RMS}}) = \frac{1}{3} \frac{NLAmv_{\text{RMS}}}{V}. \quad (13)$$

Substituting this expression for the momentum transferred to the wall of the container into Eq. (10), we obtain:

$$F_{\text{ave}} = \frac{\Delta p}{\Delta t} = \left[\frac{1}{3} \frac{NLAmv_{\text{RMS}}}{V} \right] / (L/v_{\text{RMS}}), \quad (14)$$

or:

$$F_{\text{ave}} = \frac{NAmv_{\text{RMS}}^2}{3V}. \quad (15)$$

Thus the average pressure of the gas is:

$$P = \frac{1}{3} \frac{N}{V} mv_{\text{RMS}}^2. \quad (16)$$

4. The Equation of State of an Ideal Gas

4a. Definition of State. In general, the state³ of a system is defined by specifying a limited number of properties of the system and leaving other properties unspecified. The state of a gas is completely specified by a knowledge of three of its macroscopic properties: pressure, temperature and volume.⁴ In formal mathematical language, the equation can be written:

$$F(P, T, V, m) = 0. \quad (17)$$

By combining the expression for the pressure and temperature of an ideal gas and eliminating the term mv_{RMS}^2 , we may express the equation of state of an ideal gas as:

$$PV = NkT, \quad (18)$$

where P is the average pressure of the gas, T is the temperature of the gas, V is the volume of the gas container, N is the number of molecules (or atoms) of the gas, and k is Boltzmann's constant.

4b. Alternate Forms of the Equation of State. The equation of state of an ideal gas can be expressed in several other forms, each of which involve pressure and temperature. We can express the equation of state in terms of the number of moles of gas by using the relation:

$$n = \frac{N}{N_A}, \quad (19)$$

³The term "state" as used here implies an equilibrium state: temperature and pressure are the same at all points.

⁴An equation of state refers to a particular gas; the mass of the gas or the number of gas molecules present is implicitly specified in such an equation.

where n is the number of moles of gas, N is the number of molecules of gas, and N_A is Avogadro's number, 6.023×10^{23} . Thus $N = nN_A$, so:

$$PV = n(N_A k)T = nRT, \quad (20)$$

where we have defined a new symbol R , called the "ideal gas constant":

$$R = (6.023 \times 10^{23} \text{ mole}^{-1})(1.3805 \times 10^{-23} \text{ J/K}),$$

so:

$$R = 8.3143 \text{ J/(K mole)}. \quad (21)$$

Another form of the equation of state can be obtained by converting the number of moles of gas to the equivalent mass using the expression:

$$n = \frac{m}{M} \quad (22)$$

where m is the mass of the ideal gas in its container and M is the molecular weight of the gas. Substituting Eq. (22) into Eq. (20) and dividing each side by V we obtain:

$$P = \frac{mRT}{MV} = \rho RT/M, \quad (23)$$

where ρ is the density of the gas.

4c. Using the Equation of State. The equation of state is a powerful tool we can use to calculate the unknown macroscopic properties of an ideal gas as it changes its state. Typically we will isolate all variables on one side of the equation and all constants on the other side to define a "system invariant." For example, if our ideal gas system is "closed," i.e., no molecules enter or leave the container, then N and n are constants, so the equation of state may be written as:

$$\frac{PV}{T} = Nk = nR = \text{constant}. \quad (24)$$

Thus the pressure, temperature and volume of the gas in one state, called state 1, are related to the corresponding properties in another state, called state 2, by the relation:

$$\frac{P_1 V_1}{T_1} = \frac{P_2 V_2}{T_2} = \text{constant}. \quad (25)$$

Note that we do not need to know the constant if only one property is unknown in one of the states. Given the pressure and volume in both

states and the temperature in state 1, the temperature in state 2 may be calculated this way:

$$T_2 = T_1 \left[\frac{P_2}{P_1} \right] \left[\frac{V_2}{V_1} \right]$$

One advantage of this method of calculating changes of state of an ideal gas is that units tend to cancel and so conversion of units is minimized. It should be noted that absolute (e.g. the Kelvin scale) temperatures must be used with the equation of state.

Acknowledgments

I would like to thank J. Kovacs, M. Blair and O. McHarris for their contributions to an earlier study guide version of this module. Philippe Esch kindly pointed out a correction that needed to be made in an equation. Preparation of this module was supported in part by the National Science Foundation, Division of Science Education Development and Research, through Grant #SED 74-20088 to Michigan State University.

Glossary

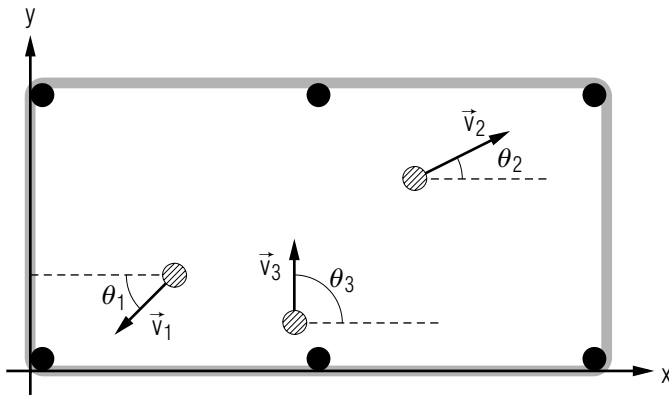
- **absolute temperature scale:** a temperature scale that assigns a temperature of zero to the lowest possible state of molecular energy. The Kelvin scale is an example of an absolute temperature scale.
- **Boltzmann's constant:** a constant, denoted by k , used to relate temperature to molecular energy. For an ideal gas, $E_{k,ave} = (3/2) k T$.
- **Celsius:** a temperature scale with increments the same size as the Kelvin scale but which assigns zero temperature to the freezing point of water. The boiling point of water is assigned to 100 °C. This range of temperatures defines the size of a degree Celsius. It is not an absolute scale of temperature.
- **equation of state:** a mathematical expression which includes a limited number of macroscopic properties of a system and completely specifies the system.
- **Fahrenheit:** a temperature scale used commonly in English-speaking countries. This scale assigns the temperature 32 °F to the freezing point of water, and 212 °F to water's boiling point. It is not an absolute scale of temperature.

- **ideal gas:** a system composed of particles which have negligible volume and interact with each other only by collisions. The particles have no structure and function as simple point masses. Real gases behave like ideal gases at sufficiently low pressures and densities.
- **Kelvin:** an absolute scale of temperature with increments the same size as those of the Celsius scale. On this scale, water freezes at 273 K and boils at 373 K.
- **mole:** an "Avogadro's number" of anything, i.e. 6.023×10^{23} of anything; like a dozen eggs, a gross of oranges, a mole of gas molecules.
- **root mean square (RMS) speed:** the speed of a particle in a statistical system which has a kinetic energy equal to the average kinetic energy of the system. The RMS speed is found by averaging the square of all particle speeds in the system and taking the square root of this mean.
- **temperature:** a macroscopic property of a system which may be statistically related to the average kinetic energy of the system (or the root mean square speed).
- **thermal equilibrium:** the state of a statistically described system where the motion of the particles is completely random and temperature is a well defined quantity.
- **thermometer:** a device used to measure temperatures. Thermometers operate via a variety of mechanisms whereby some property of a material which depends on temperature is in thermal contact with the system. Examples include the thermal expansion of liquids and gases and the electrical resistivity of a wire.

PROBLEM SUPPLEMENT

Note: Problems 12 and 13 also occur in the module's *Model Exam*.

1.



$$v_1 = 40 \text{ ft/sec}, \theta_1 = 60^\circ$$

$$v_2 = 20\sqrt{2} \text{ ft/sec}, \theta_2 = 45^\circ$$

$$v_3 = 20(\sqrt{3} - 1) \text{ ft/sec}, \theta_3 = 90^\circ$$

An x - y coordinate system is set up at one of the corners of a billiard table in the plane of the table. At a given instant, three billiard balls are observed to be moving with the speeds and directions indicated in the sketch above. The dotted lines are parallel to the x -axis.

- What is the average value of v_y , the y -component of the velocity?
 - What is the average value of v_x ?
 - Calculate the RMS value of v_x for these billiard balls.
 - Calculate the RMS value of v_y .
 - Calculate the RMS value of v .
 - If the weight of each billiard ball is one pound (1 lb), what is the average kinetic energy of these billiard balls? *Help: [S-1]*
2. Consider a simple system of two particles, each of mass M . First we have them in a situation labeled case A :

$$v_1 = (+3.0 \text{ m/s}) \hat{x}$$

$$v_2 = (-3.0 \text{ m/s}) \hat{x}$$

Then we have them in a situation labeled case B :

$$v_1 = (-53 \text{ m/s}) \hat{x}$$

$$v_2 = (-47 \text{ m/s}) \hat{x}$$

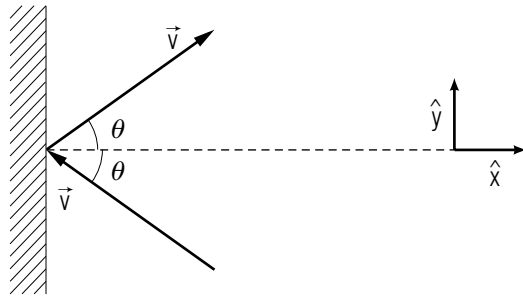
In which case does the system have a higher temperature?

3. If an ideal gas with molecules the same mass as molecular hydrogen have an RMS speed of 6.08 m/s, what is the temperature of the gas?

What should be the RMS speed of this ideal gas for the temperature to be nearer to room temperature, say 300 K? *Help: [S-2]*

4. Suppose we have two gases, both consisting of the same total number of particles, both ideal, both with the same average kinetic energy. One of the gases consists of N particles with the same mass as diatomic hydrogen; the other consists of N particles with the mass of the electron. Which gas would be at the higher temperature?
5. Suppose that, in Problem 4, one gas (H_2) consisted of N particles, the other gas (electrons) consisted of $100N$ particles, while all the other properties mentioned in Problem 4 were the same. Which gas would be at the higher temperature?
6. If the RMS speed of the molecules of a certain gas is kept constant while the number of molecules in the gas is doubled, what happens to each of the following quantities? Assume the gas is ideal and its volume is constant.
- the average kinetic energy;
 - the temperature of the gas;
 - the pressure of the gas.

7.



A hard sphere of mass M makes an elastic collision with a rigid wall. Before the collision the velocity of the sphere is v , making an angle θ with the x -direction. After the collision its speed is still v , but the velocity v makes an angle θ reflected about the x -axis from its incident direction, as shown in the sketch.

- What is the x -component of the incident velocity?
 - What is the x -component of the velocity of the rebounding sphere?
 - What is the y -component of the incident velocity?
 - What is the y -component of the velocity of the rebounding sphere?
 - What is the change in the x -component of the velocity as a result of the collision?
 - What is the change in the y -component of the velocity as a result of the collision?
 - What is the change in momentum of the sphere?
 - During an interval of time, Δt , which includes the interval during which the sphere rebounded from the wall, what is the average force that the sphere exerts on the wall?
 - Suppose there are many such spheres in this region making collisions with the wall, all with incident x -component of velocity $-v_x$. If these spheres are distributed so that there are N_x of them per unit length of distance in the x -direction, all headed left, how many of these strike the wall per second? How many strike the wall in time interval Δt ? What is the average force exerted on the wall?
8. Room temperature is usually taken to be 20°C . Calculate the corresponding Fahrenheit value of this temperature.

- A normal human body temperature is usually assumed to be 98.6°F . What is this temperature in degrees Celsius?
- Scuba divers use tanks of compressed air strapped to their backs to breathe underwater. A regulator attached to the tank feeds air to the diver at the same pressure as the ambient water so that pressures will be balanced throughout the diver's body. The pressure of the water is given by: $P = P_0 + \rho gh$ where P_0 is atmospheric pressure at sea level ($P_0 = 1 \text{ atm} = 1.013 \times 10^5 \text{ N/m}^2$), ρ is the density of water, g is the acceleration of gravity, and h is the depth of immersion. As a short-hand method, divers use the fact that each 33 ft of depth increases the pressure by 1 atmosphere of pressure above atmospheric pressure. If a scuba diver were to ascend from a 33 foot depth to the surface without exhaling (i.e. holding his breath) calculate the change in volume of the air in his body, assuming air to be an ideal gas. Assume that the temperature of the air remains the same.
- When you fill up your car's tires with air at the service station, you usually set the pressure at some fixed value established by the manufacturer. However during subsequent driving the tires heat up due to friction with the road surface. Assuming the tire has no leaks and is not changing shape appreciably calculate the new tire pressure when the temperature of the air in the tires increases by 10°C . Assume that the tires initially were inflated to 25 psi at a temperature of 68°F . *Help: [S-3]*
- Four particles, each of mass 0.25 kg, have these velocities:

$$v_1 = (3.0 \text{ m/s})\hat{x} - (7.0 \text{ m/s})\hat{y}$$

$$v_2 = (4.0 \text{ m/s})\hat{y}$$

$$v_3 = (7.0 \text{ m/s})\hat{z}$$

$$v_4 = (-3.0 \text{ m/s})\hat{y}$$
 - Find the RMS speed of the particles in this system.
 - Calculate the average kinetic energy and "temperature" of the system, assuming it is in thermal equilibrium.
- An air cylinder initially at room temperature (68°F) contains 5.0 kg of gas at a pressure of 2000 psi. The cylinder then is attached to a compressor and filled to its maximum capacity with a final pressure and temperature of 3000 psi and 77°F . Calculate the additional mass of air added to the cylinder, assuming air is an ideal gas.

Brief Answers:

1. a. Zero
b. Zero
c. 16.33 ft/s
d. 24.59 ft/s
e. 29.52 ft/s
f. 13.61 ft lb
2. Both have the same temperature. In case *B*, the center of mass of the particles has a velocity of $-(50 \text{ m/s}) \hat{x}$, so that in the center of mass frame of reference both particles have speed 3 m/s.
3. $3.0 \times 10^{-3} \text{ K}$; $v_{\text{RMS}} = 1.93 \times 10^3 \text{ m/s}$ at $T = 300 \text{ K}$.
4. T is the same because $E_{\text{k,ave}}$ is the same.
5. T is the same because $E_{\text{k,ave}}$ is the same.
6. a. It remains the same.
b. It remains the same.
c. It is doubled.
7. a. $-v \cos \theta$
b. $+v \cos \theta$
c. $+v \sin \theta$
d. $+v \sin \theta$
e. $+2v \cos \theta$
f. Zero
g. $2Mv \cos \theta \hat{x}$
h. $-2Mv \cos \theta / (\Delta t) \hat{x}$
i. $N_x v_x$; $N_x v_x \Delta t$; $-2MN_x v_x^2 \hat{x}$
8. 68°F
9. 37.0°C
10. The gas doubles in volume.
11. 26 psi (a change of 1 psi).
12. a. 6.08 m/s
b. $E_{\text{k,ave}} = 4.62 \text{ J}$, $T = 2.23 \times 10^{23} \text{ K}$
13. 2.4 kg

SPECIAL ASSISTANCE SUPPLEMENT

S-1 (from PS-problem 1)

The mass of the billiard balls may be related to the weight by recalling the relation:

$$W = mg.$$

If British units such as lbs are used, then the value of g is 32 ft/s².

S-2 (from PS-problem 3)

Hydrogen is a diatomic gas, so its molecular mass is very nearly the mass of 2 protons:

$$m = 2.0159 \text{ u}$$

and 1 u (atomic mass unit) = 1.660×10^{-27} kg.

S-3 (from PS-problem 11)

Remember that to use the equation of state you must specify temperature on an absolute scale, e.g. degrees Kelvin.

MODEL EXAM

$$k = 1.3805 \times 10^{-23} \text{ J/K}; \quad R = 8.3143 \text{ J/(K mole)}$$

$$1 \text{ atm} = 1.013 \times 10^5 \text{ N/m}^2 = 14.70 \text{ lb/in}^2$$

1. See Output Skills K1-K4 in this module's *ID Sheet*.
2. Four particles, each of mass 0.25 kg, have these velocities:

$$v_1 = (3.0 \text{ m/s})\hat{x} - (7.0 \text{ m/s})\hat{y}$$

$$v_2 = (4.0 \text{ m/s})\hat{y}$$

$$v_3 = (7.0 \text{ m/s})\hat{z}$$

$$v_4 = (-3.0 \text{ m/s})\hat{y}$$

- a. Find the RMS speed of the particles in this system.
 - b. Calculate the average kinetic energy and "temperature" of the system, assuming it is in thermal equilibrium.
3. An air cylinder initially at room temperature (68 °F) contains 5.0 kg of gas at a pressure of 2000 psi. The cylinder then is attached to a compressor and filled to its maximum capacity with a final pressure and temperature of 3000 psi and 77 °F. Calculate the additional mass of air added to the cylinder, assuming air is an ideal gas.

Brief Answers:

1. See this module's *text*.
2. See Problem 12 in this module's *Problem Supplement*.
3. See Problem 13 in this module's *Problem Supplement*.

